



Name _____


Date: _____

We are Family

Write the family of multiplication and division facts for each picture







Write each answer.

Circle the fact that does not belong to the family.

$6 \times 3 = \underline{\hspace{2cm}}$

$3 \times 6 = \underline{\hspace{2cm}}$

$18 \div 3 = \underline{\hspace{2cm}}$

$6 \times 6 = \underline{\hspace{2cm}}$

$18 \div 6 = \underline{\hspace{2cm}}$

$32 \div 4 = \underline{\hspace{2cm}}$

$7 \times 4 = \underline{\hspace{2cm}}$

$28 \div 4 = \underline{\hspace{2cm}}$

$4 \times 7 = \underline{\hspace{2cm}}$

$28 \div 7 = \underline{\hspace{2cm}}$

$54 \div 9 = \underline{\hspace{2cm}}$

$6 \times 9 = \underline{\hspace{2cm}}$

$45 \div 9 = \underline{\hspace{2cm}}$

$9 \times 6 = \underline{\hspace{2cm}}$

$54 \div 6 = \underline{\hspace{2cm}}$

$36 \div 9 = \underline{\hspace{2cm}}$

$4 \times 9 = \underline{\hspace{2cm}}$

$9 \times 4 = \underline{\hspace{2cm}}$

$36 \div 4 = \underline{\hspace{2cm}}$

$32 \div 4 = \underline{\hspace{2cm}}$

$45 \div 5 = \underline{\hspace{2cm}}$

$8 \times 5 = \underline{\hspace{2cm}}$

$40 \div 8 = \underline{\hspace{2cm}}$

$5 \times 8 = \underline{\hspace{2cm}}$

$40 \div 5 = \underline{\hspace{2cm}}$

$81 \div 9 = \underline{\hspace{2cm}}$

$72 \div 9 = \underline{\hspace{2cm}}$

$9 \times 9 = \underline{\hspace{2cm}}$